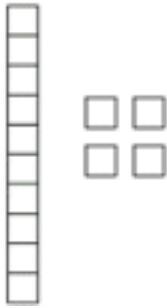
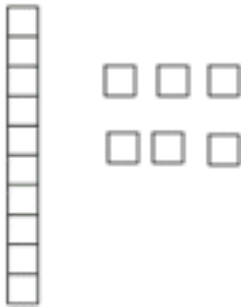


Name _____


Count the tens and ones. Write the number in the big box.



A vertical ten rod and four individual unit blocks arranged in a 2x2 square.




Two vertical ten rods and three individual unit blocks arranged in two rows of two and one.




A vertical ten rod and six individual unit blocks arranged in a vertical column of five and one to the side.



A vertical ten rod and two individual unit blocks arranged vertically.



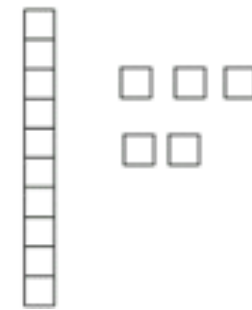
A vertical ten rod and one individual unit block.



A vertical ten rod and three individual unit blocks arranged in two rows of two and one.



A vertical ten rod and seven individual unit blocks arranged in a vertical column of five and two to the side.



A vertical ten rod and five individual unit blocks arranged in two rows of three and two.