

Name : _____

Score : _____

Teacher : _____

Date : _____

Directions: Convert the fraction into its decimal equivalent. Then record it in the proper space on the number line.




A = $\frac{2}{5}$

B = $\frac{3}{5}$

C = $\frac{1}{10}$

D = $\frac{4}{5}$

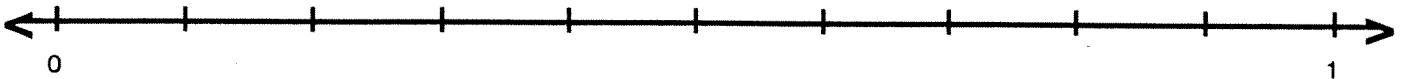


A = $\frac{3}{10}$

B = $\frac{3}{5}$

C = $\frac{4}{5}$

D = $\frac{2}{5}$

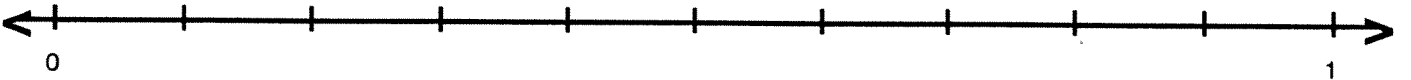


A = $\frac{7}{10}$

B = $\frac{1}{10}$

C = $\frac{1}{2}$

D = $\frac{3}{5}$

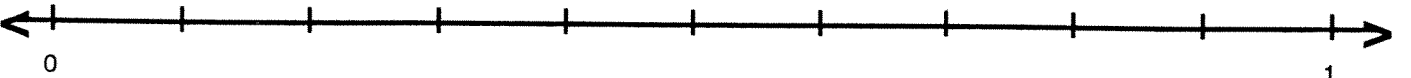


A = $\frac{1}{2}$

B = $\frac{3}{10}$

C = $\frac{3}{5}$

D = $\frac{7}{10}$



A = $\frac{7}{10}$

B = $\frac{3}{5}$

C = $\frac{9}{10}$

D = $\frac{1}{5}$

Who's the best teacher ever?