



1



How much money is shown above?

Answer _____


2



How much money is shown above?

Answer _____

3



How much money is shown above?

Answer _____

4

Shandra had one 5-dollar bill, four dimes, three nickels, and three pennies. How much money did she have in all?

Answer _____

5

Daniel went to the movies and paid \$6.79 for his ticket. He also bought a soda for \$2.65. How much did Daniel spend in all?

Answer _____

6

Jorge had three 5-dollar bills, three quarters, and six pennies. How much money did Jorge have in all?

Answer _____

7 Wendy bought lip balm and a banana at the grocery store. The total cost was \$3.29. She gave the clerk a \$5 bill. How much change did Wendy receive?





ANSWER _____

8 A pickle at the concession stand costs \$0.45. A soda costs \$1.50. A lollipop costs \$0.75. Ethan bought a soda and a lollipop. He gave the cashier \$5. How much change did he receive?

ANSWER _____

9. Alissa bought a bag of candy for \$4.90. She gave the salesclerk a five-dollar bill.

Which of the following sets of money shows how much change Alissa will get back?

- A. 
- B. 
- C. 
- D. 

10 Sara bought a book for \$6.36. She gave the clerk a \$10 bill. How much change should she receive?

- A. 3 dollar bills, 2 quarters, 3 nickels, and 4 pennies
- B. 4 dollar bills, 2 quarters, 2 nickels, and 4 pennies
- C. 3 dollar bills, 1 quarter, 2 nickels, and 4 pennies
- D. 3 dollar bills, 2 quarters, 2 nickels, and 4 pennies